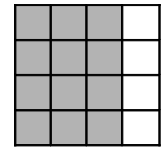
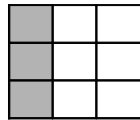


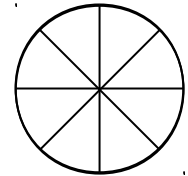
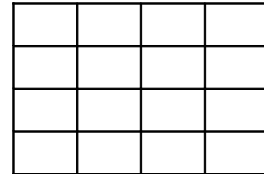


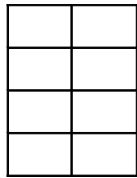
Imię i nazwisko .....

Zad. 1 Jaką część figury zamalowano na rysunku?



--	--	--	--	--

Zad. 2 Zamaluj odpowiednią część figury:



$\frac{3}{8}$	$\frac{11}{20}$	$\frac{3}{4}$	$\frac{1}{8}$	$\frac{1}{4}$
---------------	-----------------	---------------	---------------	---------------

Zad. 3 Uzupełnij, wpisując odpowiednie ułamki:

35 minut = ..... godziny

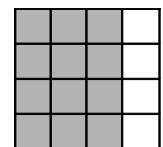

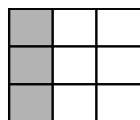

2 dni = ..... tygodnia

6 cm = ..... metra

1 kg 25 dag = ..... kg

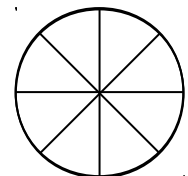
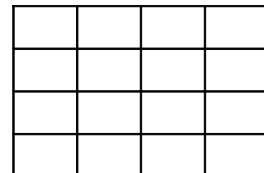

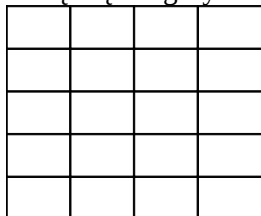
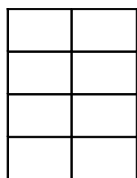
Imię i nazwisko .....

Zad. 1 Jaką część figury zamalowano na rysunku?



--	--	--	--	--

Zad. 2 Zamaluj odpowiednią część figury:



$\frac{3}{8}$	$\frac{11}{20}$	$\frac{3}{4}$	$\frac{1}{8}$	$\frac{1}{4}$
---------------	-----------------	---------------	---------------	---------------

Zad. 3 Uzupełnij, wpisując odpowiednie ułamki:

35 minut = ..... godziny

2 dni = ..... tygodnia

6 cm = ..... metra

1 kg 25 dag = ..... kg